




Let's Revise

1. Write the following numbers in expanded form.

a)  110 = + +

b)  250 = + +

c)  323 = + +

d)  661 = + +

2. Write the following numbers in short form.

a) $300 + 20 + 8 =$

b) $500 + 80 + 6 =$

c) $600 + 50 + 9 =$

d) $100 + 90 + 2 =$

3 Write the place and place value of the underlined digits.

Number	Place	Place value
a) 34 <u>0</u>		
b) <u>6</u> 28		
c) 1 <u>8</u> 4		
d) <u>4</u> 51		

4 Form the smallest and greatest numbers using the given digits.

Digits	Greatest Number	Smallest Number
a) 3, 1, 9		
b) 4, 2, 8		
c) 7, 6, 0		
d) 6, 2, 4		